


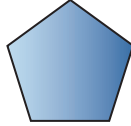
3 Vad heter formen?

Underlägg 24
Färgmönster 18

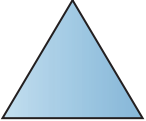



1  3. hexagon
9. kvadrat

2  5. pyramid
7. rektangel


13  13. hexagon
22. pentagon

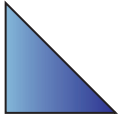
14  16. kon
20. pyramid


3  11. likbent triangel
12. liksidig triangel


4  10. cirkel
12. cylinder

15  18. cylinder
24. sfär

16  15. rätvinklig triangel
21. likbent triangel

5  2. likbent triangel
5. rätvinklig triangel

6  8. oktagon
9. hexagon

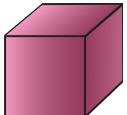
17  14. rätvinklig triangel
24. likbent triangel

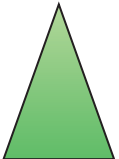
18  22. likbent triangel
23. liksidig triangel


7  1. romb
6. kub

8  3. kon
4. cylinder

19  13. rektangel
17. kvadrat

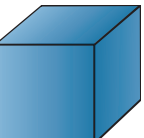
20  14. kvadrat
16. kub

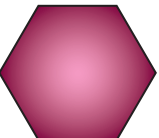
9  10. rätvinklig triangel
11. likbent triangel


10  6. cylinder
8. pentagon

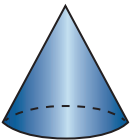
21  18. romb
19. kvadrat

22  19. oktagon
23. hexagon

11  4. kub
7. pyramid

12  1. pentagon
2. hexagon

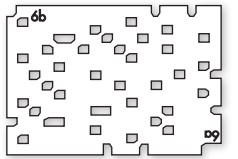
23  15. cylinder
20. kon

24  17. kon
21. kub

7 Omkrets

Underlägg 6

Hålskiva 6b



Räkna ut omkretsen med hjälp av rutorna.

12 numbered shapes on a grid:

- 1: 2x2 teal square
- 2: 2x2 pink square
- 3: L-shaped grey shape (3x2)
- 4: 1x4 magenta horizontal bar
- 5: 1x2 orange horizontal bar
- 6: 2x2 dark blue square with one corner missing
- 7: 2x2 teal square
- 8: T-shaped grey shape (3x2)
- 9: 1x1 magenta square
- 10: 2x2 dark blue square
- 11: T-shaped orange shape (3x2)
- 12: T-shaped pink shape (3x2)

12 numbered shapes on a grid:


- 13: 3x3 pink square
- 14: L-shaped magenta shape (3x2)
- 15: 2x2 dark blue square with one corner missing
- 16: 2x2 dark blue square with one corner missing
- 17: F-shaped orange shape (3x3)
- 18: T-shaped teal shape (3x2)
- 19: T-shaped grey shape (3x2)
- 20: T-shaped pink shape (3x2)
- 21: H-shaped magenta shape (3x2)
- 22: T-shaped orange shape (3x2)
- 23: 2x2 teal square
- 24: T-shaped grey shape (3x2)

- 8
- 10
- 12
- 14
- 16
- 18

- 14
- 16
- 18
- 20
- 22
- 24

12 Kubdiagram 1

Underlägg 24
Färgmönster 41



Hitta rätt kubbild. Alla kuber i en stapel har samma färg.

