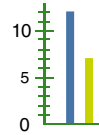

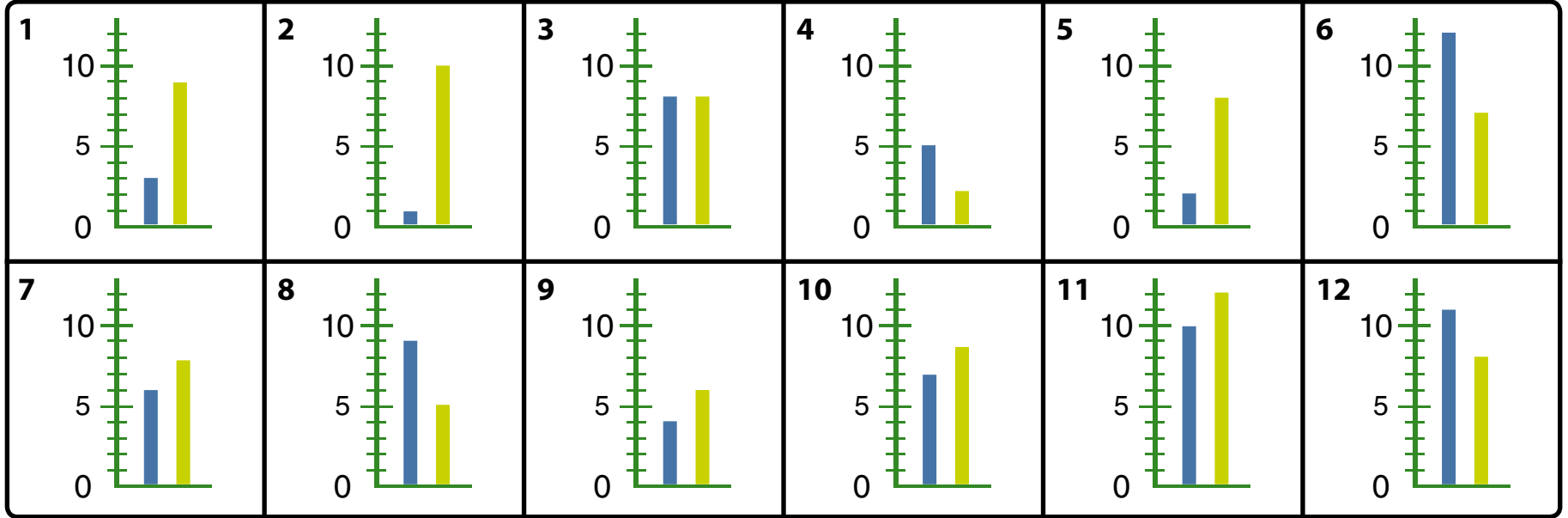


8 Hitta stolpdiagrammet som visar samma antal frukter!

Äpp- len	12
Päron	7



1 <table border="1"><tr><td>Äpp- len</td><td>12</td></tr><tr><td>Päron</td><td>7</td></tr></table>	Äpp- len	12	Päron	7	2 <table border="1"><tr><td>Äpp- len</td><td>9</td></tr><tr><td>Päron</td><td>5</td></tr></table>	Äpp- len	9	Päron	5	3 <table border="1"><tr><td>Äpp- len</td><td>7</td></tr><tr><td>Päron</td><td>9</td></tr></table>	Äpp- len	7	Päron	9	4 <table border="1"><tr><td>Äpp- len</td><td>10</td></tr><tr><td>Päron</td><td>12</td></tr></table>	Äpp- len	10	Päron	12	5 <table border="1"><tr><td>Äpp- len</td><td>5</td></tr><tr><td>Päron</td><td>2</td></tr></table>	Äpp- len	5	Päron	2	6 <table border="1"><tr><td>Äpp- len</td><td>3</td></tr><tr><td>Päron</td><td>9</td></tr></table>	Äpp- len	3	Päron	9
Äpp- len	12																												
Päron	7																												
Äpp- len	9																												
Päron	5																												
Äpp- len	7																												
Päron	9																												
Äpp- len	10																												
Päron	12																												
Äpp- len	5																												
Päron	2																												
Äpp- len	3																												
Päron	9																												
7 <table border="1"><tr><td>Äpp- len</td><td>2</td></tr><tr><td>Päron</td><td>8</td></tr></table>	Äpp- len	2	Päron	8	8 <table border="1"><tr><td>Äpp- len</td><td>1</td></tr><tr><td>Päron</td><td>10</td></tr></table>	Äpp- len	1	Päron	10	9 <table border="1"><tr><td>Äpp- len</td><td>4</td></tr><tr><td>Päron</td><td>6</td></tr></table>	Äpp- len	4	Päron	6	10 <table border="1"><tr><td>Äpp- len</td><td>11</td></tr><tr><td>Päron</td><td>8</td></tr></table>	Äpp- len	11	Päron	8	11 <table border="1"><tr><td>Äpp- len</td><td>8</td></tr><tr><td>Päron</td><td>8</td></tr></table>	Äpp- len	8	Päron	8	12 <table border="1"><tr><td>Äpp- len</td><td>6</td></tr><tr><td>Päron</td><td>8</td></tr></table>	Äpp- len	6	Päron	8
Äpp- len	2																												
Päron	8																												
Äpp- len	1																												
Päron	10																												
Äpp- len	4																												
Päron	6																												
Äpp- len	11																												
Päron	8																												
Äpp- len	8																												
Päron	8																												
Äpp- len	6																												
Päron	8																												

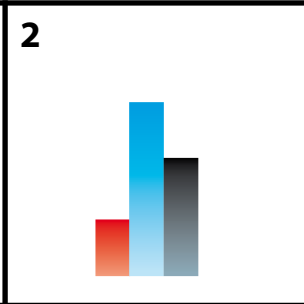
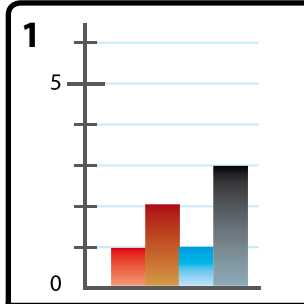


14 Minns du begreppen?

tallinje

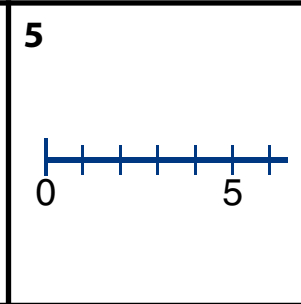
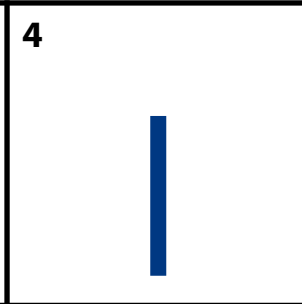


1 tallinje	2 stolpe	3 staplar	4 tabell	5 kolumn	6 rad
7 cell	8 stolp- diagram	9 stapel- diagram	10 linje- diagram	11 cirkel- diagram	12 cirkel- segment



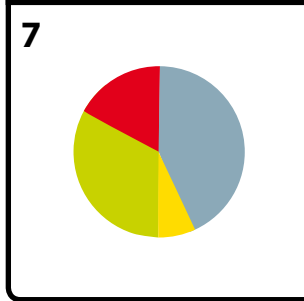
3

Potatis	12	10	3
---------	----	----	---



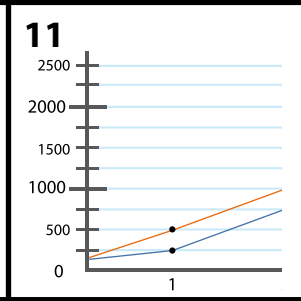
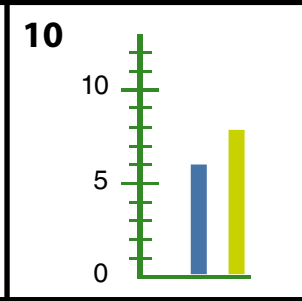
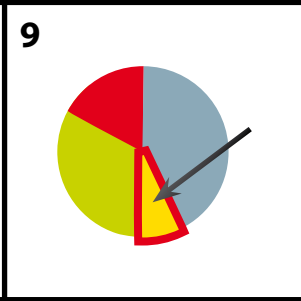
6

	Kött	Fisk	Kyckling
Potatis	12	10	3
Ris	1	6	11
Pasta	8	5	9



8

Kött
12
1
8



12

	Kött	Fisk	Kyckling
Potatis	12	10	3
Ris	1	6	11
Pasta	8	5	9

